



Самос туннелі

АТЫ-ЖӨНІ:

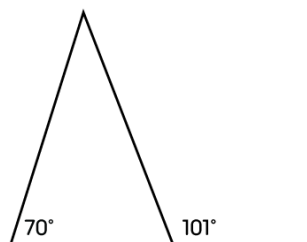
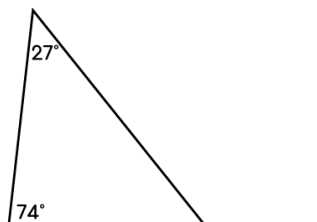
СЫНЫБЫ:

КҮНІ:

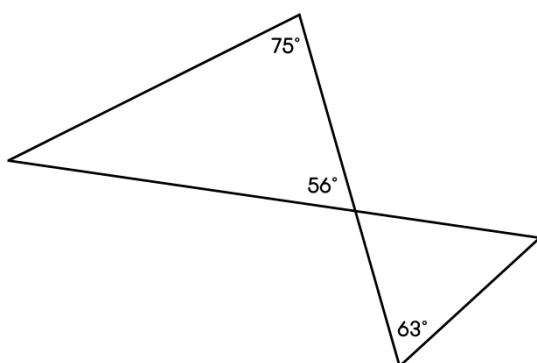


Негізгі деңгей

1) Үшбұрыштардағы барлық белгісіз бұрыштарды есептеңіздер.



2) Үшбұрыштардағы барлық белгісіз бұрыштарды есептеңіздер.



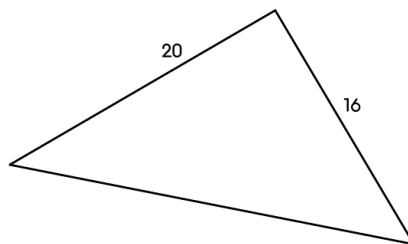
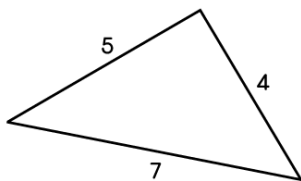


Самос туннелі

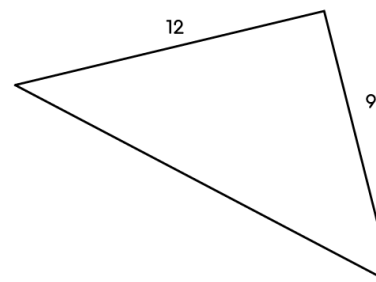
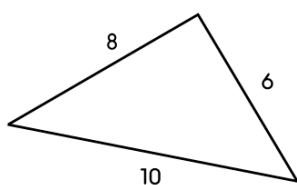
Негізгі деңгей

3) Төмендегі үшбұрыштар бір-біріне ұқсас болып келеді. Белгісіз қабырғалардың ұзындығын табыңыздар.

a)



b)





Самос туннелі

АТЫ-ЖӨНІ:

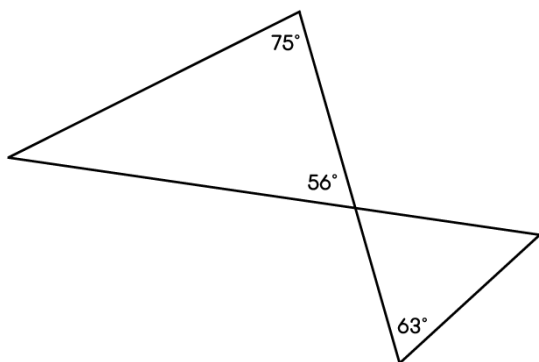
СЫНЫБЫ:

КҮНІ:

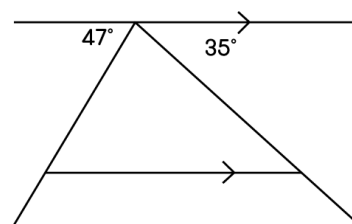
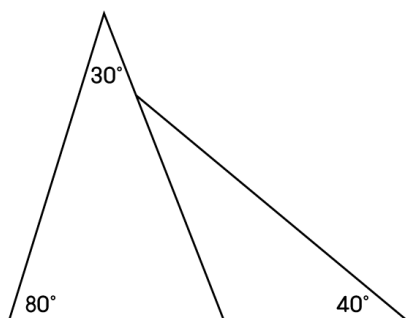


Орташа деңгей

1) Үшбұрыштардағы барлық белгісіз бұрыштарды есептеңіздер.



2) Барлық белгісіз бұрыштарды есептеңіздер.



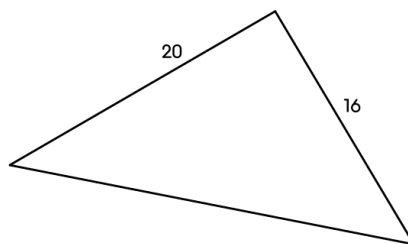
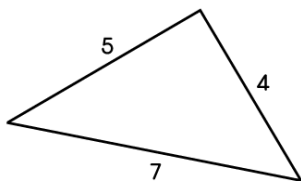


Самос туннелі

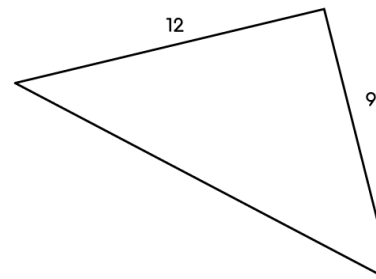
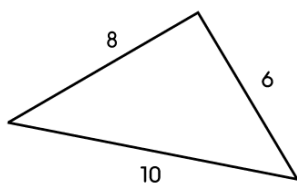
Орташа деңгей

3) Төмендегі үшбұрыштар бір-біріне ұқсас болып келеді. Белгісіз қабырғалардың ұзындығын табыңыздар.

a)



b)





Самос туннелі

АТЫ-ЖӨНІ:

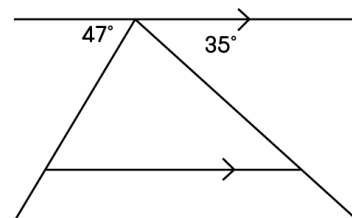
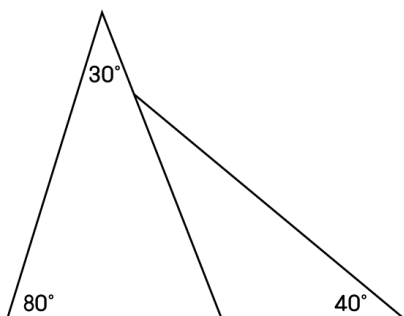
СЫНЫБЫ:

КҮНІ:



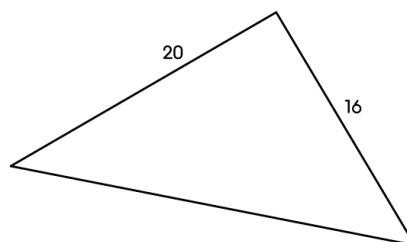
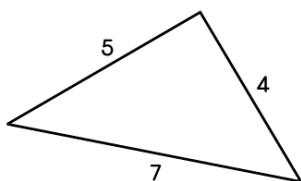
Тереңдетілген деңгей

1) Барлық белгісіз бұрыштарды есептеңіздер.

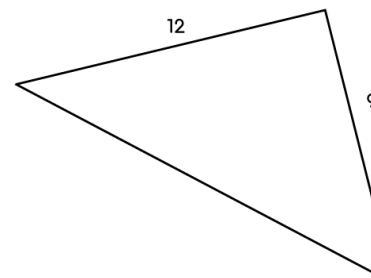
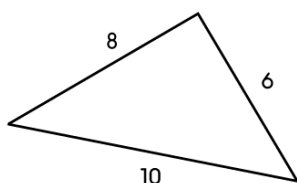


2) Төмендегі үшбұрыштар бір-біріне ұқсас болып келеді. Белгісіз қабырғалардың ұзындығын табыңыздар.

a)



b)





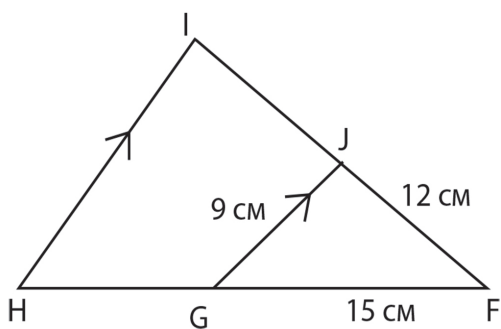
Самос туннелі

Тереңдетілген деңгей

3) Төмендегі үшбұрыштағы келесі мәндерді табыңыз:

a) HI ұзындығы

b) IJ ұзындығы



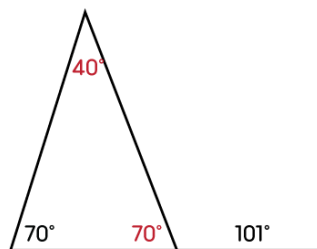
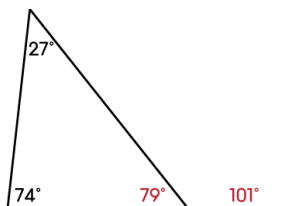


Самос туннелі

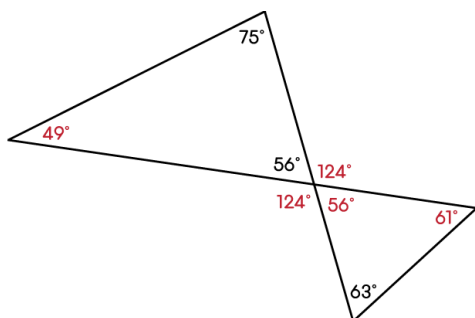
ЖАУАПТАР

Негізгі деңгей

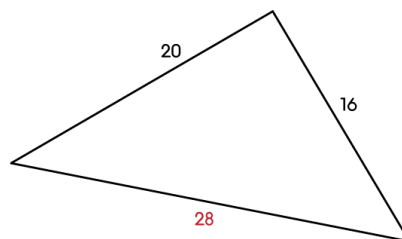
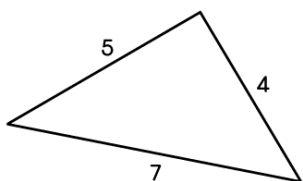
1)



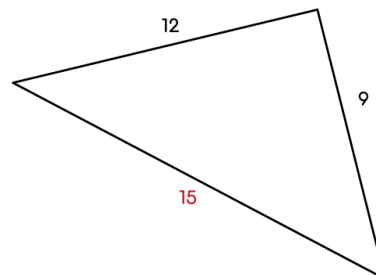
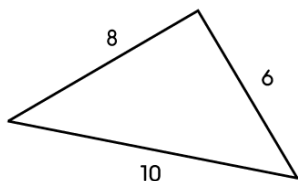
2)



3) a)



b)



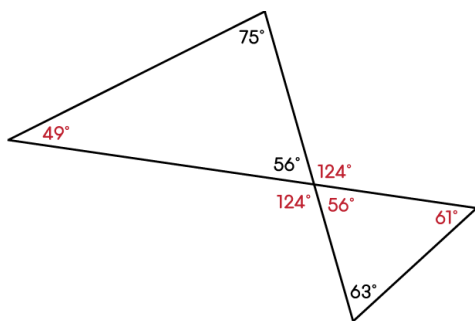


Самос туннелі

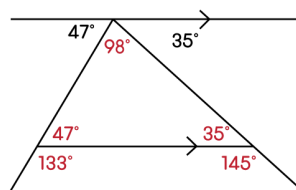
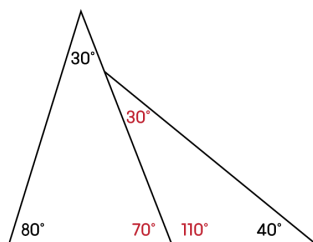
ЖАУАПТАР

Орташа деңгей

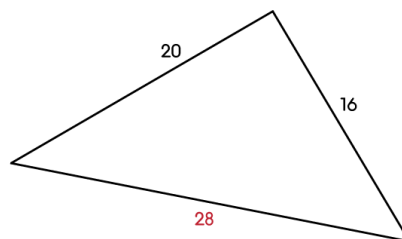
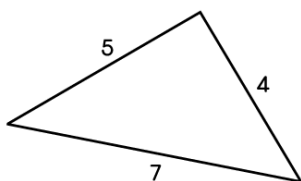
1)



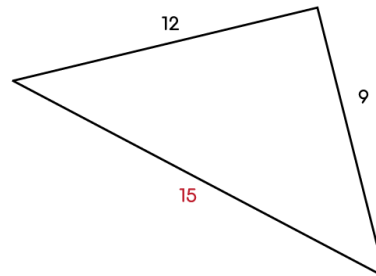
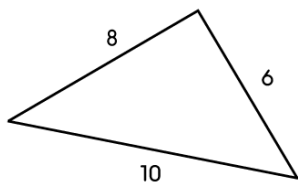
2)



3) a)



b)



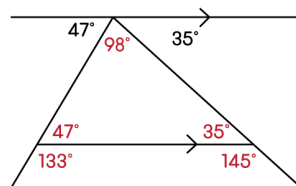
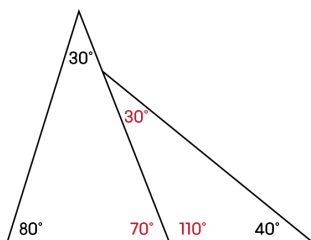


Самос туннелі

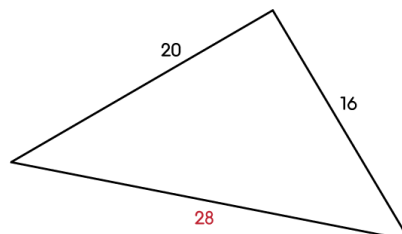
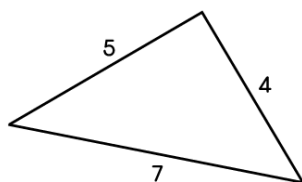
ЖАУАПТАР

Тереңдетілген деңгей

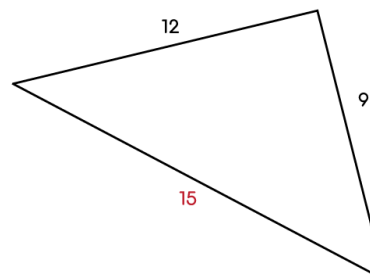
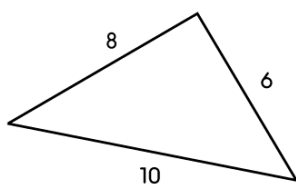
1)



2) a)



b)



3) a) 15 см

b) IJ = 8 см; IF = 20 см